

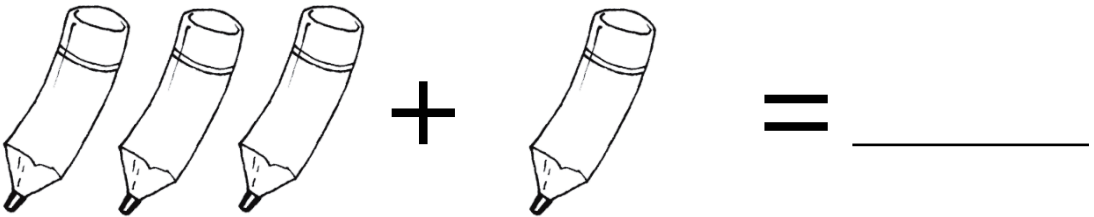
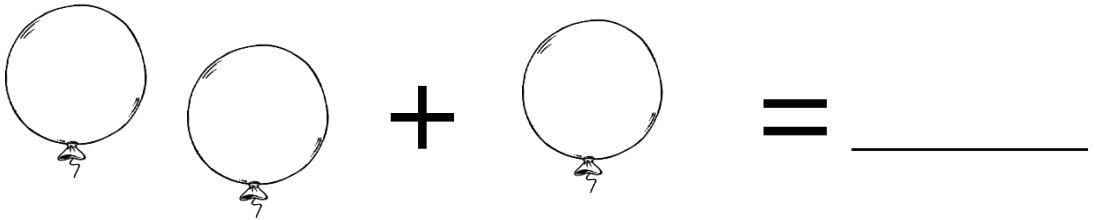
Nome : _____

INFORMAÇÃO : _____

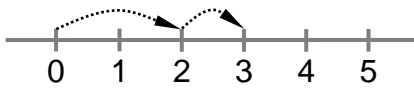
Data : ___/___/___



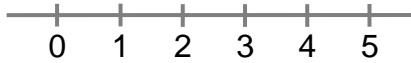
Conta e soma as imagens.



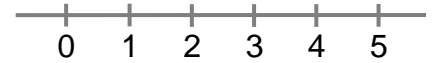
Com a ajuda da reta numérica completa as adições.



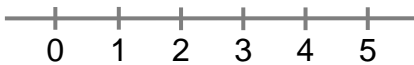
$$2 + 1 = \boxed{3}$$



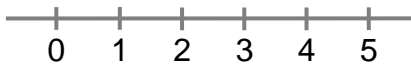
$$1 + 1 = \boxed{}$$



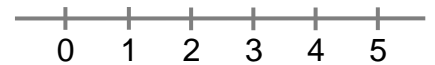
$$1 + 3 = \boxed{}$$



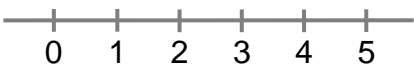
$$2 + 3 = \boxed{}$$



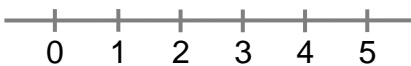
$$4 + 1 = \boxed{}$$



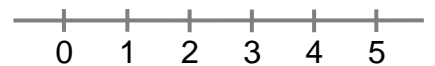
$$2 + 2 = \boxed{}$$



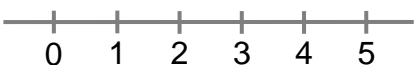
$$1 + 4 = \boxed{}$$



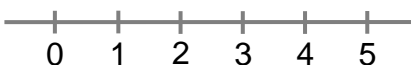
$$1 + 2 = \boxed{}$$



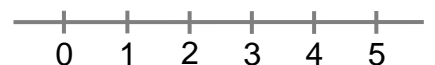
$$3 + 1 = \boxed{}$$



$$3 + 2 = \boxed{}$$



$$5 + 0 = \boxed{}$$



$$2 + 1 = \boxed{}$$

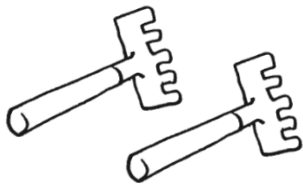
Nome : _____

INFORMAÇÃO : _____


Data : ___/___/___



Conta e soma as imagens.




+



=




+



=



Com a ajuda do colar de contas completa as adições.



$2 + 1 = \boxed{3}$



$1 + 1 = \boxed{}$



$1 + 3 = \boxed{}$



$2 + 3 = \boxed{}$



$4 + 1 = \boxed{}$



$2 + 2 = \boxed{}$



$1 + 4 = \boxed{}$



$1 + 2 = \boxed{}$



$3 + 1 = \boxed{}$



$3 + 2 = \boxed{}$



$5 + 0 = \boxed{}$



$2 + 1 = \boxed{}$

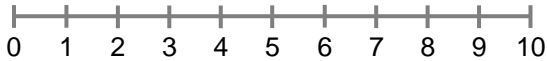
Nome : _____

INFORMAÇÃO : _____

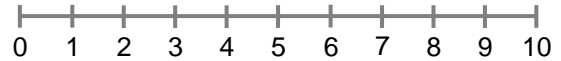
Data : __/__/__



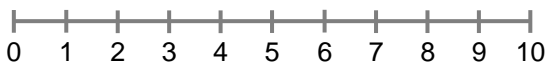
Com a ajuda do colar de contas completa as adições.



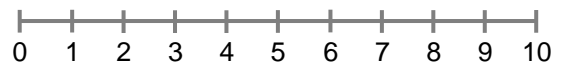
$$5 + 2 = \square$$



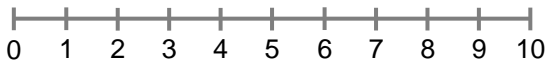
$$3 + 4 = \square$$



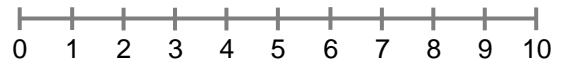
$$2 + 2 = \square$$



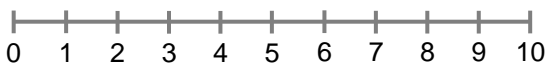
$$5 + 3 = \square$$



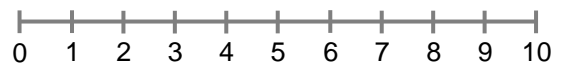
$$1 + 6 = \square$$



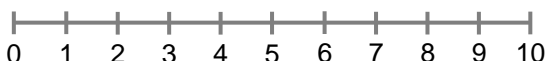
$$2 + 3 = \square$$



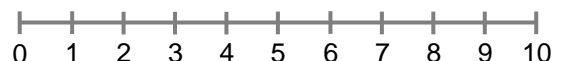
$$5 + 1 = \square$$



$$6 + 2 = \square$$



$$4 + 4 = \square$$



$$7 + 1 = \square$$

Nome : _____

INFORMAÇÃO : _____

Data : __/__/__



Com a ajuda do colar de contas completa as adições.



$2 + 5 = \square$



$4 + 3 = \square$



$3 + 5 = \square$



$2 + 2 = \square$



$6 + 1 = \square$



$3 + 2 = \square$



$1 + 5 = \square$



$2 + 6 = \square$



$4 + 4 = \square$



$1 + 7 = \square$



$3 + 5 = \square$



$4 + 2 = \square$

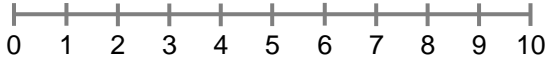
Nome : _____

INFORMAÇÃO : _____

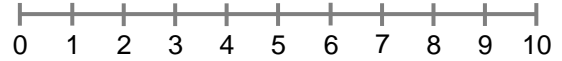
Data : __/__/__



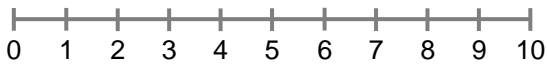
Com a ajuda do colar de contas completa as adições.



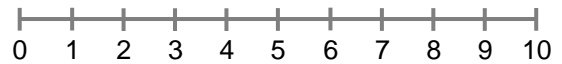
$7 + 2 = \square$



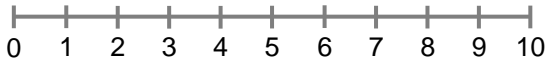
$6 + 4 = \square$



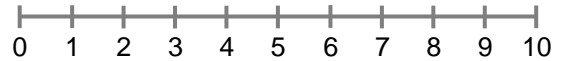
$2 + 8 = \square$



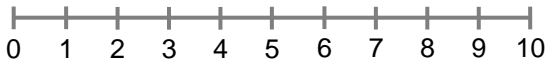
$6 + 3 = \square$



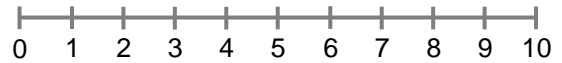
$5 + 4 = \square$



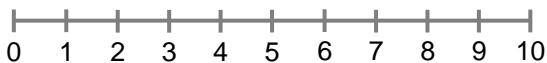
$3 + 7 = \square$



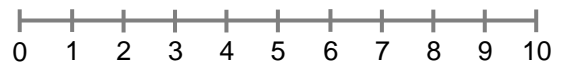
$5 + 5 = \square$



$4 + 3 = \square$



$9 + 1 = \square$



$2 + 6 = \square$

Nome : _____

INFORMAÇÃO : _____

Data : ___/___/___



Com a ajuda do colar de contas completa as adições.



$$8 + 1 = \square$$



$$1 + 7 = \square$$



$$6 + 2 = \square$$



$$9 + 1 = \square$$



$$3 + 4 = \square$$



$$5 + 5 = \square$$



$$7 + 3 = \square$$



$$4 + 5 = \square$$



$$3 + 6 = \square$$



$$8 + 2 = \square$$



$$4 + 6 = \square$$



$$2 + 7 = \square$$

Nome : _____

INFORMAÇÃO : _____

Data : __/__/__



Com a ajuda do colar de contas completa as adições.

$5 + \square = 10$

$4 + \square = 6$

$3 + \square = 6$

$7 + \square = 9$

$5 + \square = 8$

$3 + \square = 5$

$6 + \square = 10$

$3 + \square = 7$

$5 + \square = 9$

$8 + \square = 10$

$6 + \square = 7$

$2 + \square = 4$

$4 + \square = 10$

$1 + \square = 7$

$8 + \square = 9$

$9 + \square = 10$

$6 + \square = 8$

$7 + \square = 10$